



Draw the quantity of eggs and add them. Write the answer in the square.




4

9



8

8



11

7



12

6