



How many fish do you count ? Circle the right number.




3 4 6



2 1 5



5 4 6




6 8 5




6 5 7



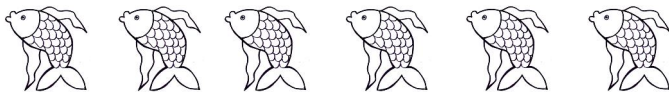
3 5 7



7 4 9



9 6 10



6 8 7



4 8 4




10 8 6



7 2 8


How many fish do you count ? Circle the right number.




3 2 6




2 1 5



5 4 6



6 8 5




6 5 7



3 5 7




7 3 9



9 6 10



6 5 7



4 8 4



10 8 9



7 3 8

How many fish do you count ? Circle the right number.




3 2 6




2 1 5



5 4 6




6 9 5




6 5 7



3 5 7



7 4 9



9 2 3



6 5 7



4 8 4



10 8 9



7 3 8